

NAVODILO ZA DELO NA DALJAVO – 5. RAZRED NGL

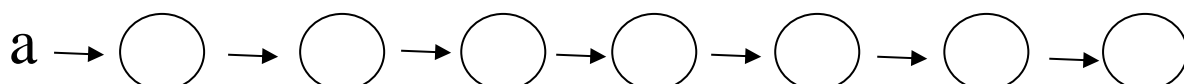
GLASBENA ŠOLA RAVNE NA KOROŠKEM

DATUM: 18. 3. 2020

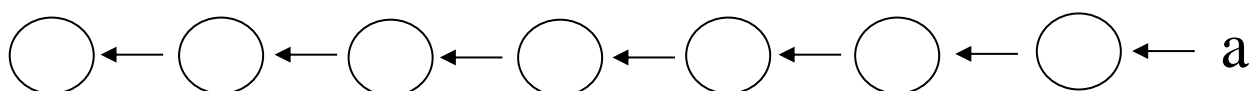
Dragi učenec(a).

Pri pouku nauka o glasbi na daljavo boš utrjeval(a) že pridobljeno znanje. Reši naloge na učnih listih. Naloge lahko prepišeš tudi v notni zvezek ali lista natisneš in daš v mapo.

1. Napiši, kako si v kvintnem krogu sledijo molove lestvice z višaji.



2. Napiši, kako si v kvintnem krogu sledijo molove lestvice z nižaji.




3. Določi ime molove lestvice glede na predznake.

The staff shows the following key signatures from left to right: two sharps (F# and C#), three sharps (F#, C#, and G#), two sharps (F# and C#), one sharp (F#), one flat (Bb), two flats (Bb and Eb), one flat (Bb), and no sharps or flats (C major).

4. Napiši naravni dis-mol.

5. Napiši harmonični f-mol.


6. Napiši obrnitve intervalov.



A musical staff in treble clef with a key signature of one flat (Bb). The notes are: Bb (quarter), G (quarter), F (quarter), E (quarter), D (quarter), and C# (quarter). Below the staff are six labels with arrows indicating the direction of the inversion:

v2↑ / ____ zv4↑ / ____ v6 ↓ / ____ m7↓ / ____ č5↑ / ____ v3↓ / ____

7. Napiši sekstakorde (6) in kvartsekstakorde (6/4).



A musical staff in treble clef with a key signature of one flat (Bb). The chords are: d6 (D-F-A), d6/4 (D-F-A-C), m6 (D-F-A-C), m6/4 (D-F-A-C#), d6 (D-F-A), and m6/4 (D-F-A-C).

d6 d6/4 m6 m6/4 d6 m6/4

$$d6 = m3 + \check{c}4$$

$$d6/4 = \check{c}4 + v3$$

$$m6 = v3 + \check{c}4$$

$$m6/4 = \check{c}4 + m3$$

Želim ti uspešno delo in vse dobro.

Lep pozdrav, učiteljica Valerija Pisar