

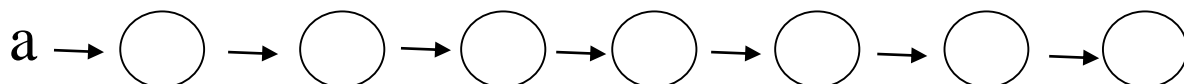
## Navodilo za učenje na daljavo – Ngl.5- 7.5.2020, GŠ, Odd. Dravograd

Dragi učenec(a).

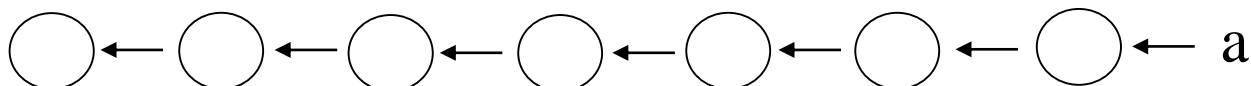
Pri pouku Nauka o glasbi na daljavo boš utrjeval(a) že pridobljeno znanje. Reši naloge na učnem listu. Naloge lahko prepíšeš tudi v notni zvezek ali lista natisneš in daš v mapo.

Delo si razdeli čez cel teden!

1. Napiši, kako si v kvintnem krogu sledijo molove lestvice z višaji.



2. Napiši, kako si v kvintnem krogu sledijo molove lestvice z nižaji.



3. Določi ime molove lestvice glede na predznake.

A musical staff in treble clef showing key signatures for D major (two sharps), E major (three sharps), F major (no sharps or flats), G major (one sharp), and C major (no sharps or flats). Below the staff are eight empty circles for identifying the notes.


5. Napiši naravni dis-mol.

An empty musical staff in treble clef for writing the natural D minor scale.

5. Napiši harmonični f-mol.


An empty musical staff in treble clef for writing the harmonic F minor scale.

6. Napiši obrnitve intervalov.



A musical staff in treble clef with a key signature of one flat (B-flat). The notes are: B-flat (quarter), B-flat (half), C (half), D (half), B-flat (quarter), and C-sharp (quarter). Below the staff are six labels with arrows indicating the direction of the interval inversion: v2↑/\_\_\_, zv4↑/\_\_\_, v6↓/\_\_\_, m7↓/\_\_\_, č5↑/\_\_\_, and v3↓/\_\_\_.

7. Napiši sekstakorde (6) in kvartsekstakorde (6/4).



A musical staff in treble clef with a key signature of one flat (B-flat). The chords are: d6 (D4, F5, A5), d6/4 (D4, F5, A5, B4), m6 (D4, F5, A5, B-flat4), m6/4 (D4, F5, A5, B-sharp4), d6 (D4, F5, A5), and m6/4 (D4, F5, A5, B-flat4).

$$d6 = m3 + \check{c}4$$

$$d6/4 = \check{c}4 + v3$$

$$m6 = v3 + \check{c}4$$

$$m6/4 = \check{c}4 + m3$$

Utruj in rešuj naloge, saj se s tem pripravljáš na zaključno pisno nalogo, ki bo predvidoma v zadnjem tednu meseca maja!

Želim ti uspešno delo in vse dobro.

LP. Alenka Mori